





# Greater Than, Less Than, or Equal to



Wanda loves Halloween candy! Help her choose the Trick or Treat bag that has the most candy by comparing the number on each and writing a  $<$ ,  $>$ , or  $=$  sign in the circle.

1.   

2.   

3.   

4.   

5.   

6.   

7.   

8.   

9.   

10.   